

Name: _____

Date: _____

Block: _____

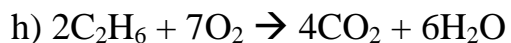
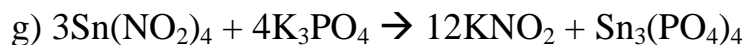
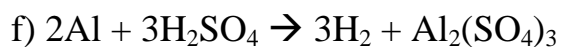
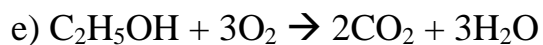
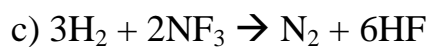
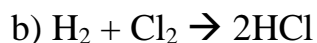
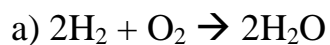
Chemical Equations

1) For each of the following equations

i) List the names of the reactants

ii) List the names of the products

iii) List the total number of each type of atoms on each side of equation.

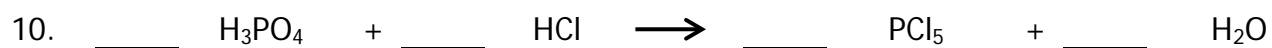

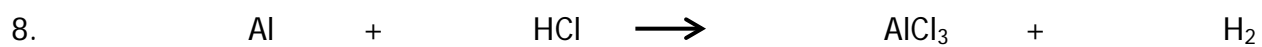
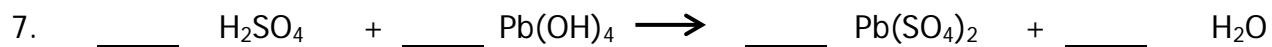
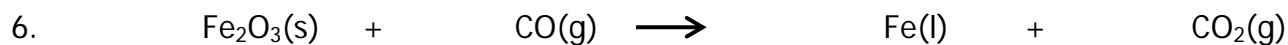
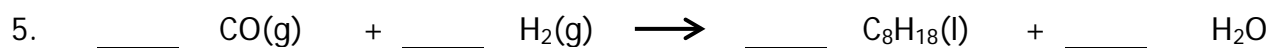
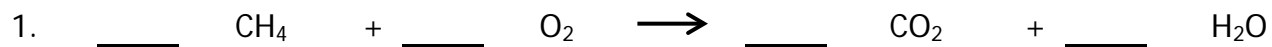


Name: _____

Date: _____

Balancing Equations

Balance the following chemical equations.



Name: _____

Date: _____

Balancing Equations

Balance the following chemical equations.

